




Name _____

Date _____


Write the fraction

1.




$$= \frac{80}{100}$$

2.




=

3.




=

4.



=

5.



=

Grade _____






Name _____

Date _____


Write the fraction

1.




$$= \frac{80}{100}$$

2.




=

3.




=

4.



=

5.



=

Grade _____






Name _____

Date _____


Write the fraction

1.




$$= \frac{80}{100}$$

2.




=

3.




=

4.



=

5.



=

Grade _____






Name _____

Date _____


Write the fraction

1.




$$= \frac{80}{100}$$

2.




=

3.




=

4.



=

5.



=

Grade _____






Name _____

Date _____


Write the fraction

1.




$$= \frac{80}{100}$$

2.




=

3.




=

4.



=

5.



=

Grade _____






Name _____


Date _____

Write the Fraction


1.  = $\frac{5}{7}$

2.  =

3.  =

4.  =

5.  =

6.  =

Grade

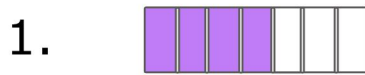




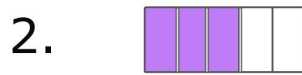
Name _____

Date _____

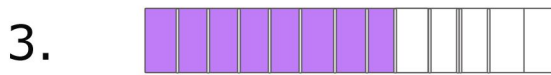
Write the Fraction




= $\frac{4}{7}$




=




=



=



=



=

Grade






Name _____

Date _____

Write the Fraction



= $\frac{5}{7}$




=



=



=



=



=

Grade





Name _____

Date _____

Write the Fraction

1.  = $\frac{3}{5}$

2.  =

3.  =

4.  =

5.  =

6.  =

Grade






Name _____

Date _____

Write the Fraction

1.  = $\frac{10}{15}$

2.  =

3.  =

4.  =

5.  =

6.  =

Grade

